


Lowell Public Schools Middle School SUMMER MATH 2025



Dear Guardian and Student,

Just like reading, regular practice over the summer with math will help your child prepare for entering the next grade. Please use the math activity list to have fun talking and doing mathematics together! Remember to always ask your child, "How did you figure it out?"

To use the math activity list:

- This summer, try to complete the number of activities recommended for your grade level.
- When you complete an activity, write down which activity you completed in the log on the back of this sheet. ([electronic form](#))
- Bring the log back to your new teacher in September.
- When you see this symbol,  choose 1 or more activities from page 2.

Some helpful materials to have around:

- Math notebook/Journal from the school year for reference
- A folder for these activities
- Blank paper
- Pencils
- A deck of playing cards
- Board Games

Another way to support the retention of math concepts and skills is to practice with online games and lessons. The following are recommended math websites:

<https://www.virtualnerd.com/>

<https://www.khanacademy.org/>

<https://solve.me.edc.org/>

<https://www.coolmathgames.com/>

<https://www.mathplayground.com/>

<https://www.hoodamath.com/>

<https://www.funbrain.com/>

<http://www.softschools.com/math/games/>

<http://www.coolmath4kids.com/>

<http://www.mathsisfun.com/>

Have a great summer vacation!

Audrey Crawford-Rivera
Math Resource Teacher
Pyne Arts Magnet School

Activity #	Date Completed	Description of Activity
Example	7/2/24	The problem about surface area of a rectangular prism. OR choice activity, like Prodigy Game...
#1		
#2		
#3		
#4		
#5		
#6		
#7		
#8		
#9		
#10		
#11		
#12		
#13		
#14		
#15		
#16		
#17		
#18		
#19		
#20		

Summer Math Activity Log for _____

Activity log for student entering grade _____. Record the dates and descriptions of the math activities you complete. Bring this log back to your new teacher in August. Or you may record your activities on [this electronic form](#).

Student's Name: _____

Parent Signature: _____

Get Ready for Grade 7



Choice Activities



1. **Do iReady, ST Math, or any of your other favorite Math apps.:** Use your school device and/or school account to login to your Clever Account.

2. **Read a Cool Mathematics Book:**

<i>The Phantom Tollbooth</i> by Norton Juster <i>Math Curse</i> by Jon Scieszka <i>Chasing Vermeer</i> by Blue Balliett <i>All of the Above</i> by Shelley Pearsall <i>The Man Who Counted: A Collection of Mathematical Adventures</i> by Malba Tahan	<i>The Number Devil</i> by Hans Magnus Enzensberger <i>Sir Cumference and the Dragon of Pi</i> by Cindy Neuschwander <i>Sir Cumference and the Sword in the Cone</i> by Cindy Neuschwander
Find Mathematics Books to Read Online at Epic!: https://www.getepic.com/ Parents can sign up for free!	

3. **Use a cool mathematics website!**

http://illuminations.nctm.org http://www.shodor.org/interactivate/activities www.aaamath.com http://nlvm.usu.edu/en/nav/vlibrary.html https://www.youcubed.org/students/	www.mathplayground.com www.funbrain.com https://www.khanacademy.org/ http://www.visualfractions.com/ https://www.prodigygame.com/
--	---

4. **Exercise your brain with a strategy game. A great way to have fun with friends and family! Some good games are listed below. Maybe you've got some favorites of your own!**

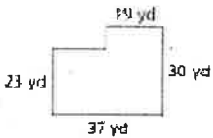


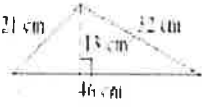




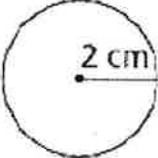

- Sequence
- Chess
- Dominoes
- Blokus
- Quirkle
- Set
- Settlers of Catan
- Ticket to Ride
- Mastermind
- Go

5. **Take a free online course designed for learners of all levels of mathematics provided by Stanford University Professor of Mathematics Education Dr. Jo Boaler. Just follow the link below:**

<https://online.stanford.edu/courses/gse-yeduc115-s-how-learn-math-students>

LPS Entering Grade 7 Summer Math

Complete at least 15 Math activities this summer. Each time, choose an activity from the boxes below – or from the back. Cross off a box when you do it and record the activity on your math log.

<p>Find the area and perimeter:</p> 	<p>If you pull eight coins from your pocket, and none of them are pennies, what is the most money that you could have? The least?</p>	<p>The perimeter of a rectangle is 72m. The width of the rectangle is 16m. What is the area of the rectangle?</p>	<p>There are 80 total students in the 7th grade this year and the ratio of boys to girls is 3:7. How many boys are in 7th grade this year?</p>	<p>Choose from the back!</p> 
<p>Solve:</p> $\frac{1}{2} + \frac{1}{4} =$ $\frac{1}{4} + \frac{1}{3} + \frac{7}{12} =$	<p>Find the prime factorization of each of the following:</p> <p>A. 39 B. 210 C. 310</p>	<p>Choose from the back!</p> 	<p>GCF (17, 34) =</p> <p>GCF (20, 25) =</p>	<p>Divide:</p> $\frac{3}{4} \div \frac{1}{2} =$
<p>Find the area.</p> 	<p>Choose from the back!</p> 	<p>If the mean, median, and mode are all equal for the following set, what is the value of x? {3,4,5,8,x}</p>	<p>If three pies require 2 dozen apples, then four pies require _____ dozen apples.</p>	<p>Express the fraction $\frac{17}{20}$ as a decimal and as a percent.</p>
<p>What is the volume and surface area of a rectangular prism with a length of 2cm, a width of 4cm, and a height of 3cm?</p>	<p>LCM (9, 15) =</p> <p>LCM (6, 18) =</p>	<p>Find the mean, median, mode, and range of the following set. {94, 96, 78, 90}</p>	<p>Choose from the back!</p> 	<p>$\frac{3}{4} \times ? = \frac{2}{3}$</p>
<p>Find each quotient.</p> $0.4 \div 0.02 =$ $0.09 \overline{)0.108}$	<p>In one year, what percent of your time is spent in school? Year=365 days School year=180 days</p>	<p>The mean of six test scores is 83. What is the sum of the six test scores?</p>	<p>$\frac{3}{5} + \frac{7}{10} - \frac{12}{10} =$</p>	<p>Choose from the back!</p> 
<p>Choose from the back!</p> 	<p>Find the area to the nearest tenth:</p> 	<p>Multiply:</p> $\frac{2}{3} \times \frac{3}{4} =$	<p>Simplify:</p> $2^3 + (8 - 5) \cdot 4 - 5^2$	<p>A jacket costs \$94.95. It is on sale for 30% off. Estimate the sale price.</p>
<p>As of today, what is the ratio of wins to total games the Red Sox have played?</p>	<p>Danielle is now as old as Kelly was eight years ago. Kelly is now 26. How old is Danielle?</p>	<p>Choose from the back!</p> 	<p>If 24 gallons of water are poured into an empty tank, then $\frac{3}{4}$ of the tank is filled. How many gallons does a full tank hold?</p>	<p>Find the area:</p> 